
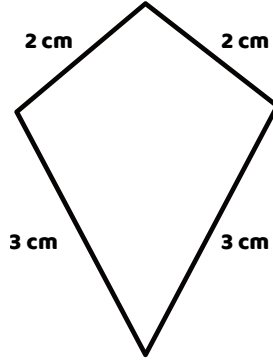
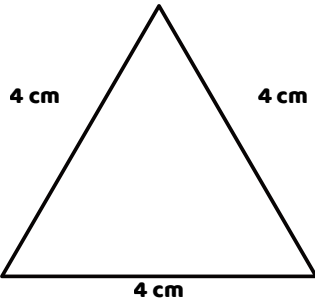
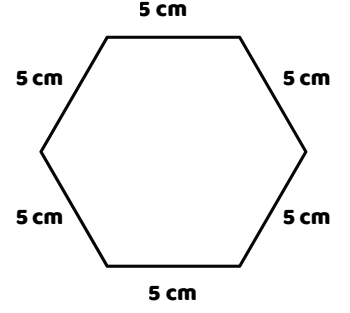
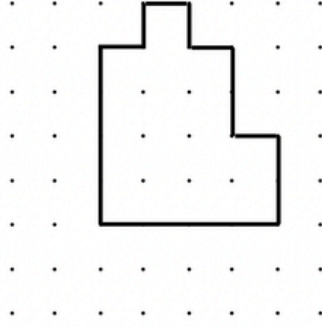
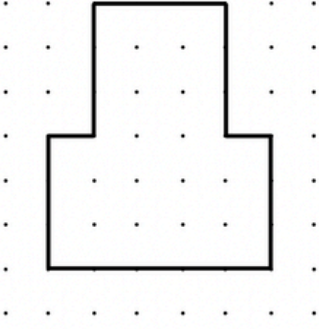


Çevrelerini Hesaplayınız



1-) Kare şeklindeki bir tarlanın bir kenarının uzunluğu 35 m'dir. Tarlanın etrafına 3 tur tel çekilecektir. Toplam kaç metre tel gerekir?

2-) Yandaki futbol sahasının çevresi kaç metredir?

